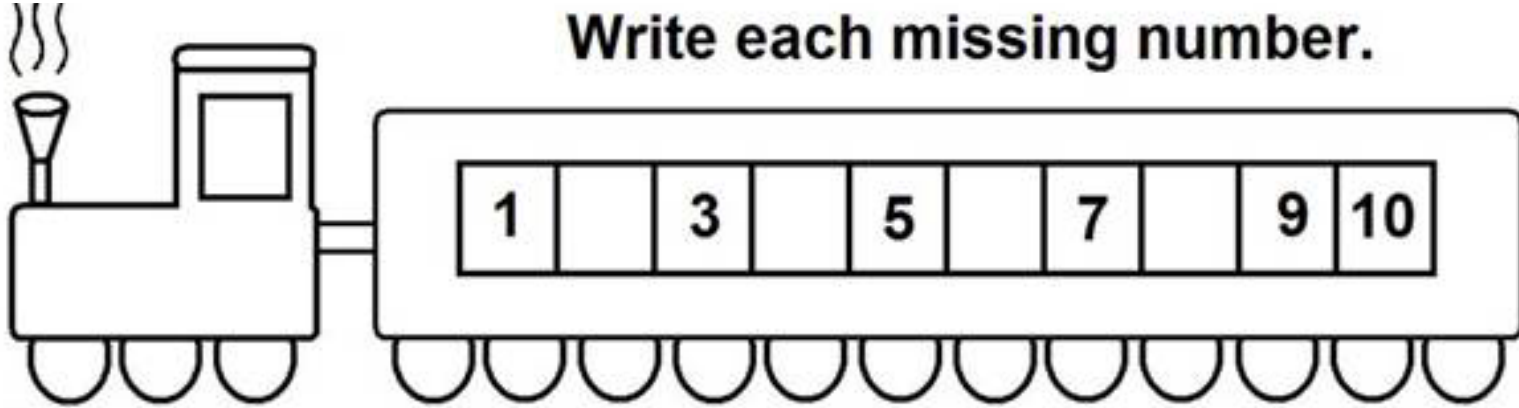


Tên (Name): _____

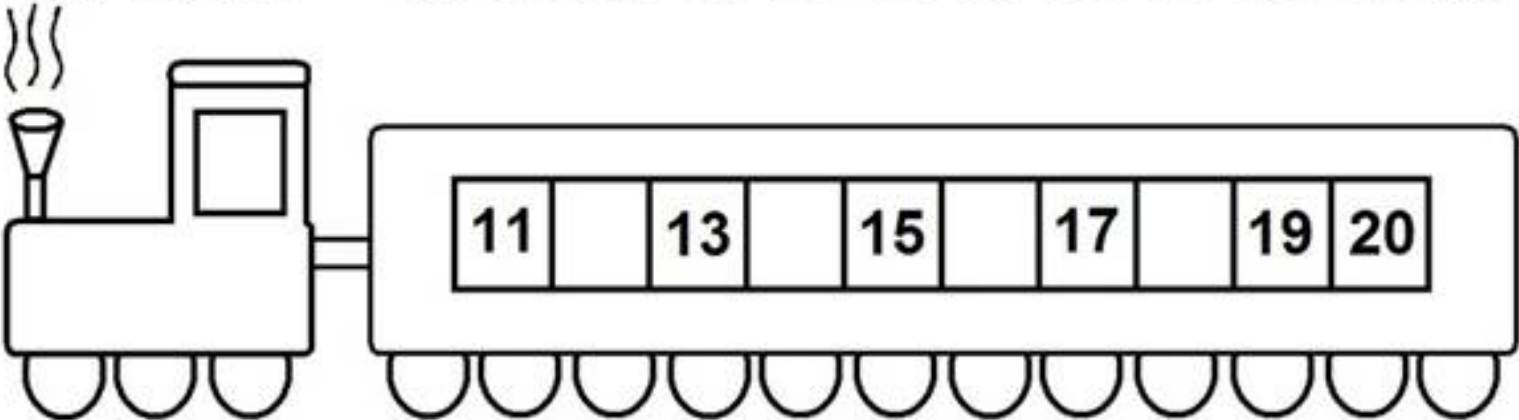
04/11/09

Xin Phụ Huynh Ký Tên: _____

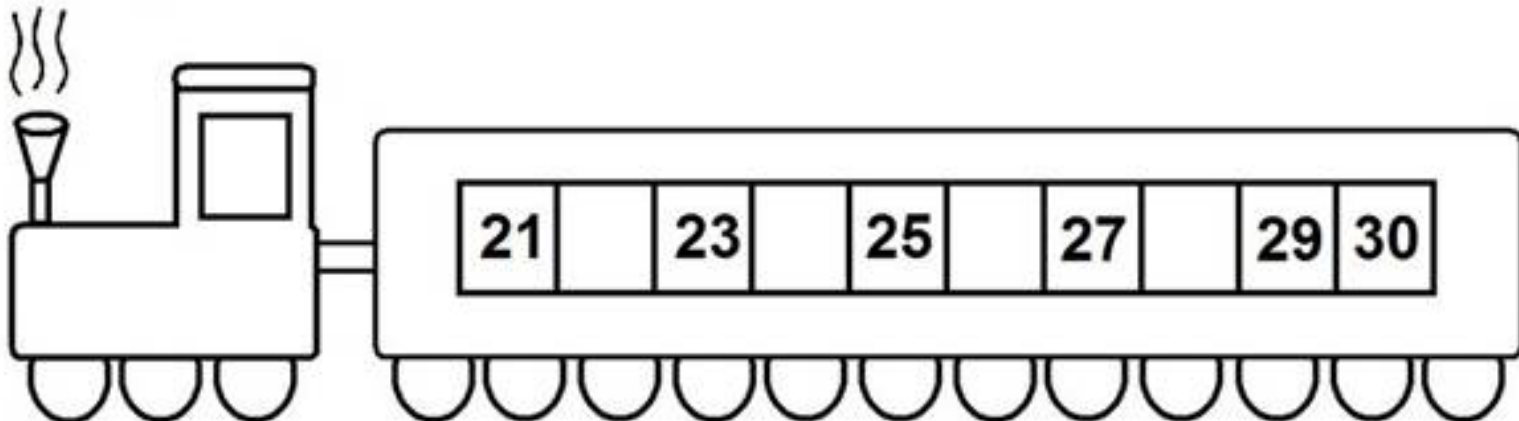
Write each missing number.



A line drawing of a train engine on the left, emitting three wavy lines of steam from its chimney. It is connected to a single rectangular train car on the right. The train car has a row of ten windows. The first window contains the number 1, the third contains 3, the fifth contains 5, the seventh contains 7, the ninth contains 9, and the tenth contains 10. The second, fourth, sixth, and eighth windows are empty. Below the train car are ten semi-circular wheels.



A line drawing of a train engine on the left, emitting three wavy lines of steam from its chimney. It is connected to a single rectangular train car on the right. The train car has a row of ten windows. The first window contains the number 11, the third contains 13, the fifth contains 15, the seventh contains 17, the ninth contains 19, and the tenth contains 20. The second, fourth, sixth, and eighth windows are empty. Below the train car are ten semi-circular wheels.



A line drawing of a train engine on the left, emitting three wavy lines of steam from its chimney. It is connected to a single rectangular train car on the right. The train car has a row of ten windows. The first window contains the number 21, the third contains 23, the fifth contains 25, the seventh contains 27, the ninth contains 29, and the tenth contains 30. The second, fourth, sixth, and eighth windows are empty. Below the train car are ten semi-circular wheels.