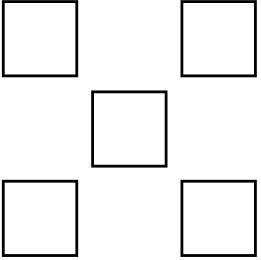

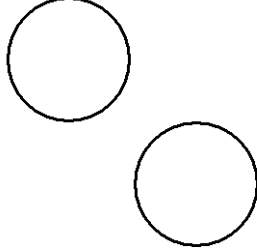








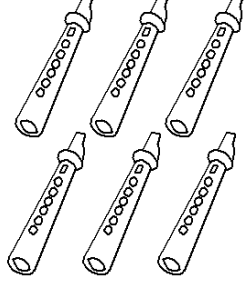

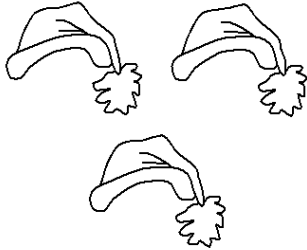




Em Học Toán

Tập Đếm (learning to count)

Các em đếm những hình trong ô vuông và khoanh tròn số cho câu trả lời
(Count the items in the square and circle the correct answer)

 <p>4 5 6</p>	 <p>7 8 9</p>	 <p>1 2 3</p>	 <p>6 7 8</p>
 <p>1 2 3</p>	 <p>1 2 3</p>	 <p>4 5 6</p>	 <p>5 6 7</p>
 <p>2 3 4</p>	 <p>1 2 3</p>	 <p>1 2 3</p>	 <p>5 6 7</p>
 <p>1 2 3</p>	 <p>1 2 3</p>	 <p>2 3 4</p>	 <p>7 8 9</p>