

Tên (Name): \_\_\_\_\_

11/22/08

Xin Phụ Huynh Ký Tên: \_\_\_\_\_

## Số Học

Các em hãy đếm những đồ vật sau đây và khoanh tròn câu trả lời.


Circle the number that shows how many are in each group.



1 2 3 4 5



1 2 3 4 5



1 2 3 4 5



1 2 3 4 5



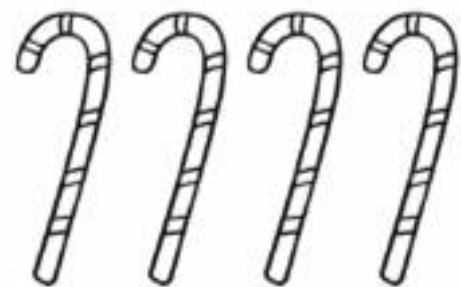
1 2 3 4 5



1 2 3 4 5



1 2 3 4 5

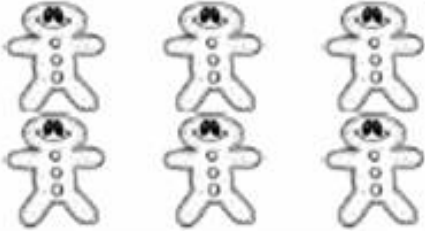


1 2 3 4 5


Tên (Name): \_\_\_\_\_

11/22/08


Xin Phụ Huynh Ký Tên: \_\_\_\_\_




6 7 8 9 10



6 7 8 9 10



6 7 8 9 10




6 7 8 9 10



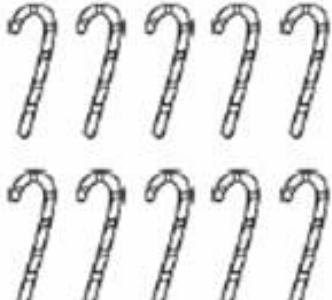
6 7 8 9 10



6 7 8 9 10



6 7 8 9 10



6 7 8 9 10